

La scala cromatica:

DO - DO# - RE - RE# - MI - FA - FA# - SOL - SOL# - LA - LA# - SI

1) scrivi le posizioni corrispondenti agli accordi

C

F

G

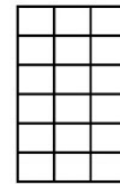
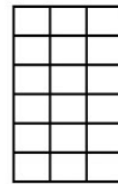
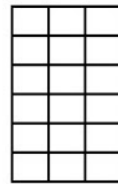
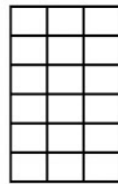
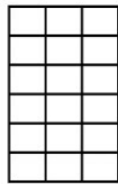
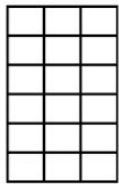
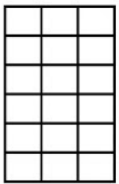
G7

D


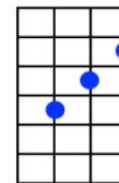
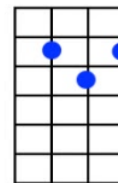
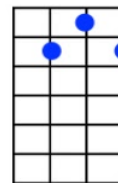
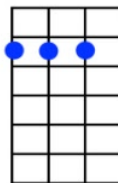
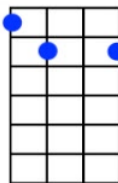
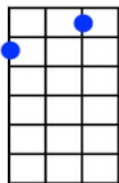
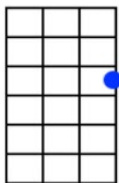
Amin

Emin

B7



2) scrivi gli accordi corrispondenti alle posizioni



3) scrivi le note corrispondenti alle posizioni

